

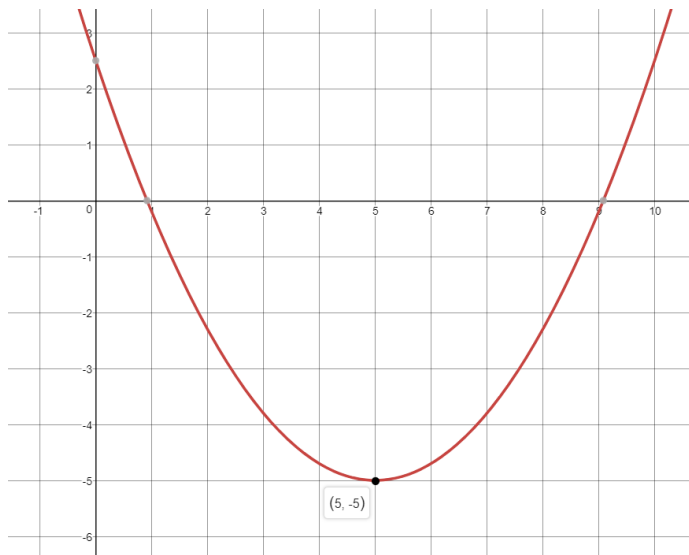


Name: _____

Date: _____ Per: _____

IM2 – 03 Key Characteristics of Graphs (Practice 2A) – Domain & Range

1. Identify the Domain, Intervals of Increase / Decrease, and Range



Fill in the Blanks using Inequality Notation

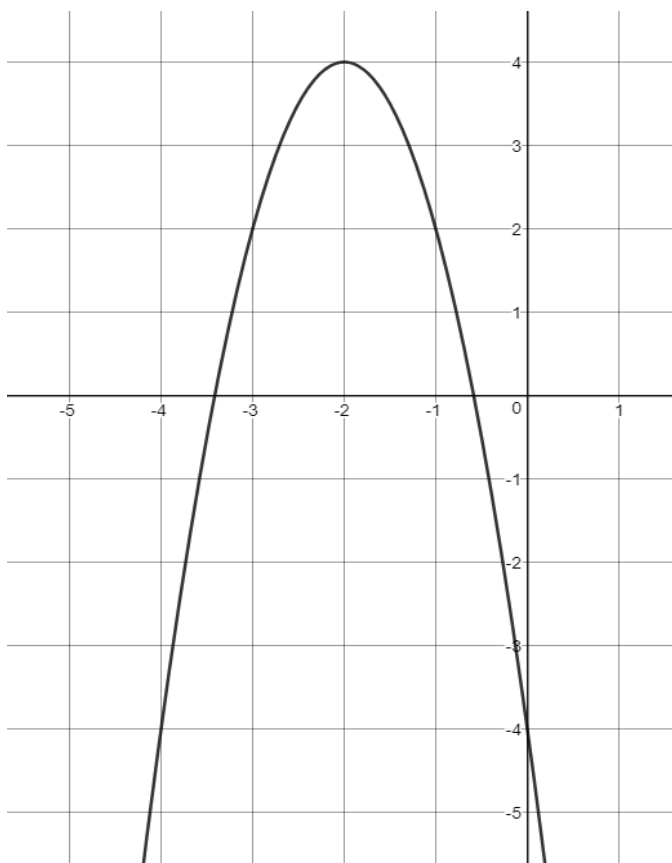
a) Domain: _____

○ Interval(s) of Increase:

○ Interval(s) of Decrease:

b) Range: _____

2. Identify the Domain, Intervals of Increase / Decrease, and Range



Fill in the Blanks using Inequality Notation

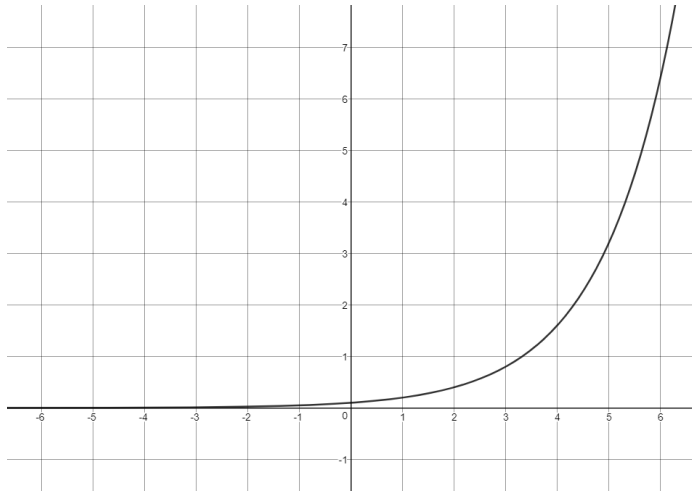
a) Domain: _____

○ Interval(s) of Increase:

○ Interval(s) of Decrease:

b) Range: _____

3. Identify the Domain, Intervals of Increase / Decrease, and Range



Fill in the Blanks using Inequality Notation

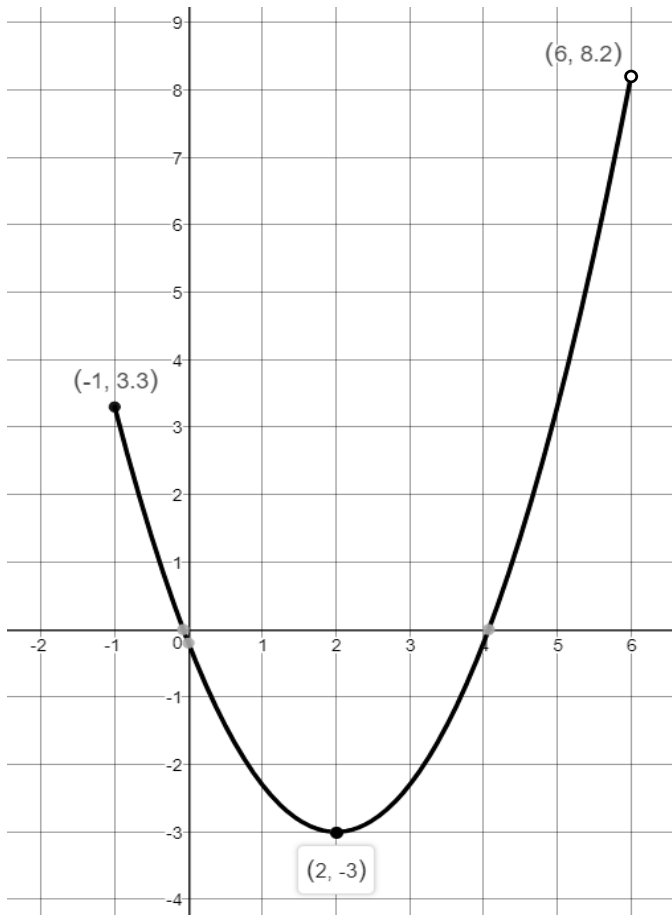
a) Domain: _____

○ Interval(s) of Increase:

○ Interval(s) of Decrease:

b) Range: _____

4. Identify the Domain, Intervals of Increase / Decrease, and Range



Fill in the Blanks using Inequality Notation

a) Domain: _____

○ Interval(s) of Increase:

○ Interval(s) of Decrease:

b) Range: _____